

Please check the examination details below before entering your candidate information

Candidate surname

Other names

Centre Number

Candidate Number

Pearson Edexcel Award

Time 30 minutes

Paper
reference

ANM10/1B

Number and Measure

Level 1

Section B (Non-Calculator)

You must have:

Ruler graduated in centimetres and millimetres, protractor, pen, HB pencil, eraser.

Total Marks

Instructions

- Use **black** ink or ball-point pen.
- **Fill in the boxes** at the top of this page with your name, centre number and candidate number.
- Answer **all** questions.
- Answer the questions in the spaces provided
– *there may be more space than you need.*
- **Calculators must not be used.**



Information

- The total mark for this section is 30
- The total mark for this paper is 80
- The marks for **each** question are shown in brackets
– *use this as a guide as to how much time to spend on each question.*

Advice

- Read each question carefully before you start to answer it.
- Try to answer every question.
- Check your answers if you have time at the end.

Turn over ►

R66140RA

©2022 Pearson Education Ltd.

L:1/1/1/1/1/



Pearson

Section B

Answer ALL questions.

Write your answers in the spaces provided.

You must write down all the stages in your working.

You must NOT use a calculator for this section.

- 1** (a) Write these percentages in order of size.
Start with the smallest percentage.

85% 15% 29% 7% 72%

(1)

- (b) Write these numbers in order of size.
Start with the smallest number.

0.85 0.7 0.78 0.9 0.08

(1)

(Total for Question 1 is 2 marks)

- 2** (a) Work out 7×6

(1)

- (b) Work out 64×1000

(1)

- (c) Write the number 46.8 to the nearest whole number.

(1)

(Total for Question 2 is 3 marks)



- 3 Maria buys 6 tins of paint for £18.49 each tin.

Which one of these amounts gives a sensible estimate for the total cost of the 6 tins of paint?

- A £0.50
- B £3.00
- C £24.00
- D £120.00
- E £320.00

.....
(Total for Question 3 is 1 mark)

- 4 (a) Measure the length of the line PQ .
Give your answer in centimetres.

P ————— Q

..... cm
(1)

- (b) Draw an angle of 75° at point A .

A —————

(1)

(Total for Question 4 is 2 marks)

5 (a) Work out $2375 + 307 + 84$

.....
(2)

(b) Work out 763×4

.....
(2)

(c) Work out $57.14 - 15.2$

.....
(2)

(Total for Question 5 is 6 marks)

DO NOT WRITE IN THIS AREA

DO NOT WRITE IN THIS AREA

DO NOT WRITE IN THIS AREA


DO NOT WRITE IN THIS AREA

DO NOT WRITE IN THIS AREA

DO NOT WRITE IN THIS AREA



- 6 (a) What fraction of this shape is shaded?



.....
(1)

- (b) Write $\frac{9}{15}$ as a fraction in its simplest form.

.....
(1)

- (c) Write down a fraction that is equivalent to $\frac{1}{3}$

.....
(1)

- (d) Work out $\frac{2}{17} + \frac{9}{17}$

.....
(1)

- (e) Write $\frac{4}{5}$ as a decimal.

.....
(1)

- (f) Write 60% as a fraction.

.....
(1)

(Total for Question 6 is 6 marks)

- 7 (a) Write down a **metric** unit that can be used to give the length of a room.

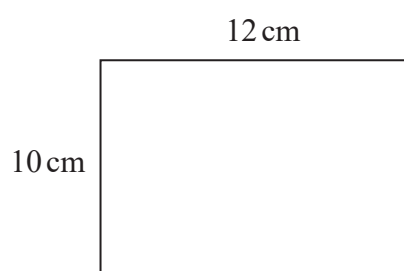
.....
(1)

- (b) Write down an **imperial** unit that can be used to give the volume of milk in a glass.

.....
(1)

(Total for Question 7 is 2 marks)

- 8 Here is a rectangle.



Work out the perimeter of the rectangle.

.....cm

(Total for Question 8 is 2 marks)



9 (a) Write down a multiple of 8

.....
(1)

(b) Write down a factor of 9

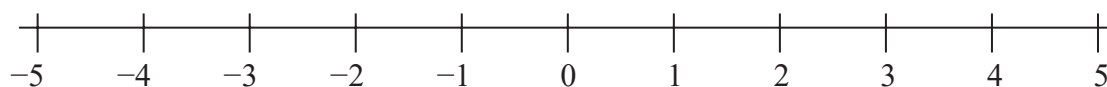
.....
(1)

(c) Write down the prime number that is greater than 5 and less than 11

.....
(1)

(Total for Question 9 is 3 marks)

10 Here is a number line.



(a) Write these numbers in order of size.
Start with the smallest number.

-2 5 -4 3 0 -1

.....
(1)

Use the number line to work out

(b) $-4 + 7$

.....
(1)

(c) $2 - 6 + 5$

.....
(1)

(Total for Question 10 is 3 marks)

TOTAL FOR SECTION B IS 30 MARKS
TOTAL FOR PAPER IS 80 MARKS

DO NOT WRITE IN THIS AREA

DO NOT WRITE IN THIS AREA

DO NOT WRITE IN THIS AREA

BLANK PAGE